



RHYTHM REVIEW

Name _____

1. Draw a circle around the correct notes:

a. quarter note


b. whole note

c. half note

2. Tap the rhythm of "Old MacDonald." Can you write the rhythm of the first line of "Old MacDonald"? (Hint: Use $\frac{4}{4}$ time) Don't forget the bar lines.

Old Mac Don - ald had some "fries"! Ee - I - Ee - I - O!


Use notes, bar lines and time signatures to create a comic strip. Sample





| | | | |
|--|--|--|--|
| | | | |
|--|--|--|--|

Time Signature Signals: Write the correct time signature for each rhythm drill; then clap or tap.

Time
Signature

1. $\frac{3}{4}$ 

2. 

3. 


Musical Math: Fill in the blank with the correct note.


1. $\text{quarter} + \text{quarter} + \text{quarter} + \text{quarter} = \underline{\text{whole}}$ 4. $\text{whole} - \text{half} = \underline{\text{half}}$


2. $\text{whole} = \underline{\text{half}} + \text{quarter}$ 5. $\text{quarter} + \text{half} + \text{quarter} = \underline{\text{whole}}$


3. $\text{quarter} = \underline{\text{half}} + \text{quarter}$ 6. $\text{half} - \text{quarter} = \underline{\text{quarter}}$

Rhythm Game: Find a Partner. Tap or clap a pattern. If your partner guesses the correct pattern, they score a point. If not, you score a point. Then switch. You guess in the second game.

a. $\frac{2}{4}$ 

b. $\frac{2}{4}$ 

c. $\frac{2}{4}$ 

d. $\frac{2}{4}$ 

Game 1 Partner Points: _____ Your Points: _____

Game 2 Your Points: _____ Partner Points: _____